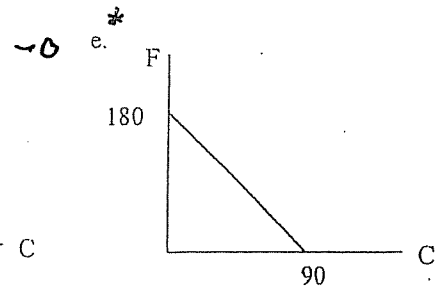
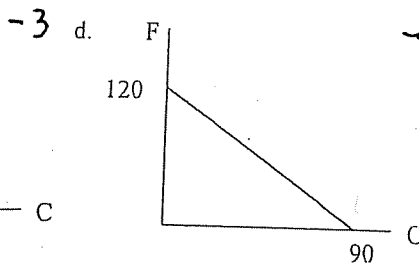
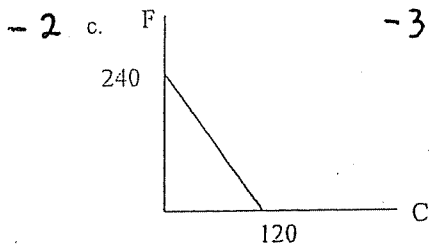
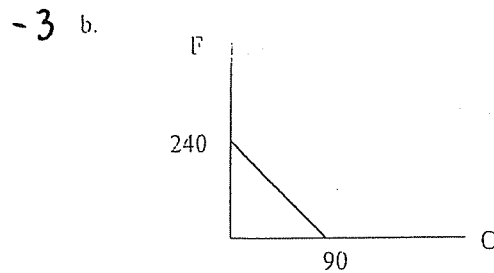
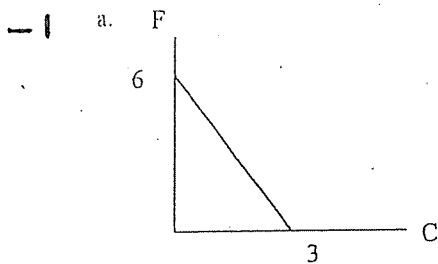


IC #4 (Key, 2-6-09)

	Units of Output per Day of Work	
	F = Food	C = Clothing
Country A	8	4
Country B	6	3

1. Based on the table above, which graph represents the production possibilities frontier for a 30-day month for country B?



2. Based on the table above, which country has an absolute advantage in production?

- a. Country A in both food & clothing\* -0
- b. Country A in only food -2
- c. Country B in both food & clothing -3
- d. Countries A & B have an absolute advantage in both food & clothing -3
- e. Country B in only clothing -2